

Geography
Higher level and standard level
Paper 2 – resources booklet

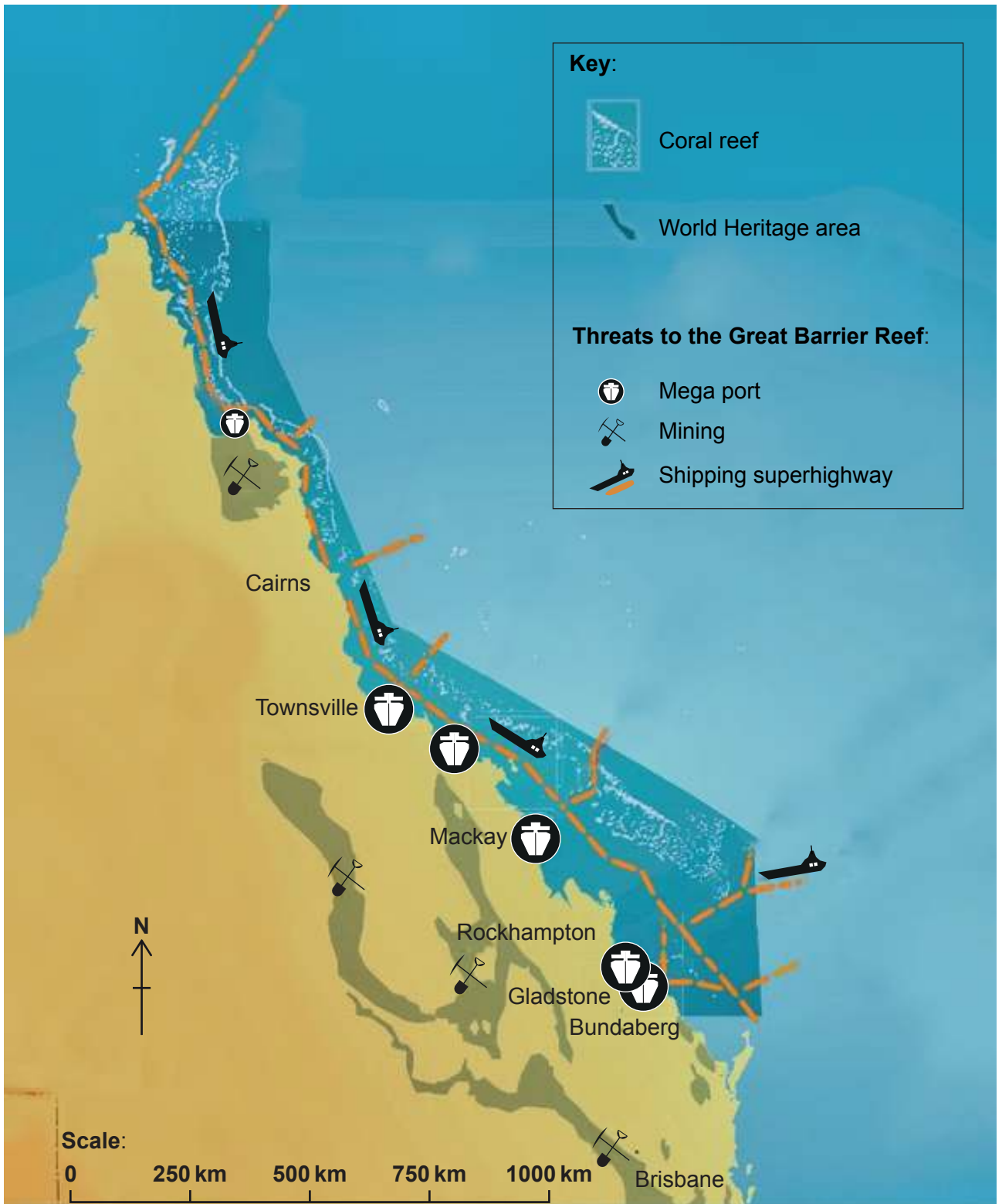
Thursday 18 May 2017 (morning)

Instructions to candidates

- Do not open this resources booklet until instructed to do so.
- Use the resources as appropriate to the questions in paper 2.

Option B — Oceans and their coastal margins

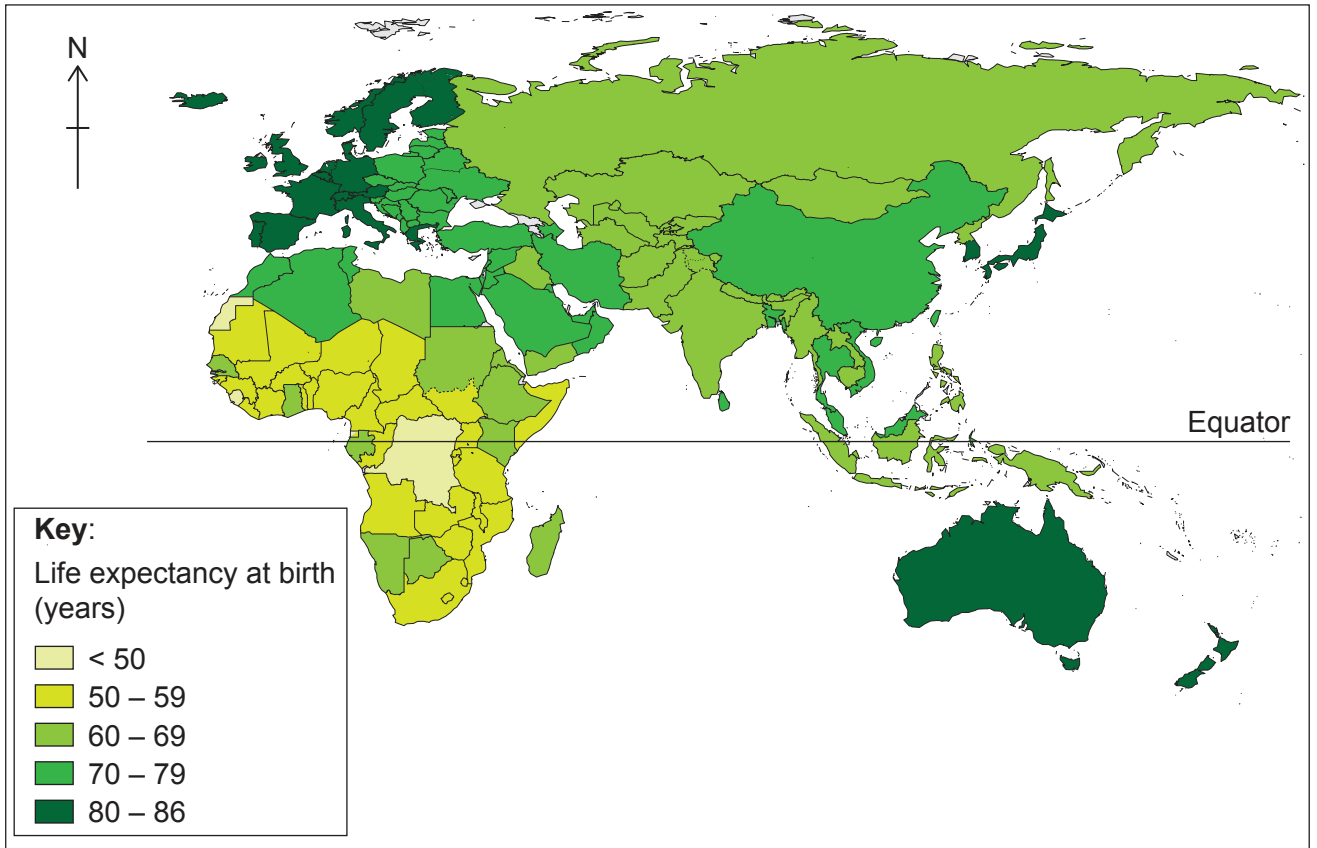
4. The map shows some of the threats to the Great Barrier Reef, Queensland, Australia.



[Source: www.fightforthereef.org.au]

Option F — The geography of food and health

11. The map shows the life expectancy at birth for countries other than those in the Americas.



[Source: Reprinted from WHO: Life Expectancy, http://www.who.int/gho/mortality_burden_disease/life_tables/situation_trends/en, accessed 2015]

Turn over

Option F — The geography of food and health

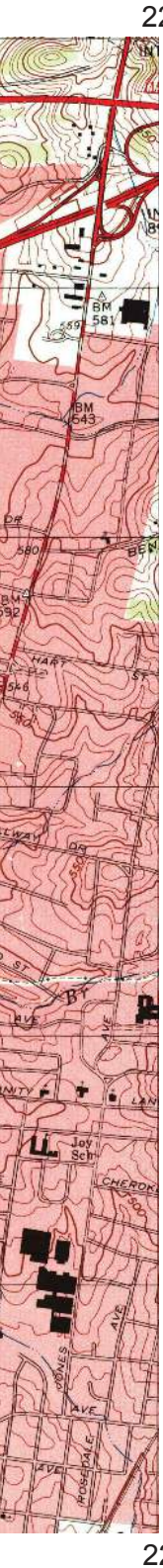
12. Map A shows part of the urban area of Nashville, US. The scale of the map is 1:24 000 and the contour interval is 10 metres. Map B shows the distribution of obesity, a form of malnutrition, for different areas of Nashville.

Map A



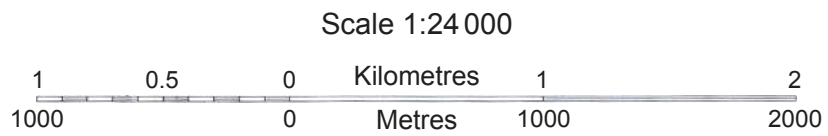
[Source: US Geological Survey, www.usgs.gov]

erval is 3 metres.



Key:

	Primary highway hard surface		Quarry or open-pit mine
	Secondary highway hard surface		Township boundary
	Local road, hard or improved surface		Standard gauge railway
	Unimproved road		Contours
	State route	WT	Water tower
	Disturbed surface	ST	Street
	Woodland	Sch	School
	Buildings	Cem	Cemetery
	Built-up area	CH	Church



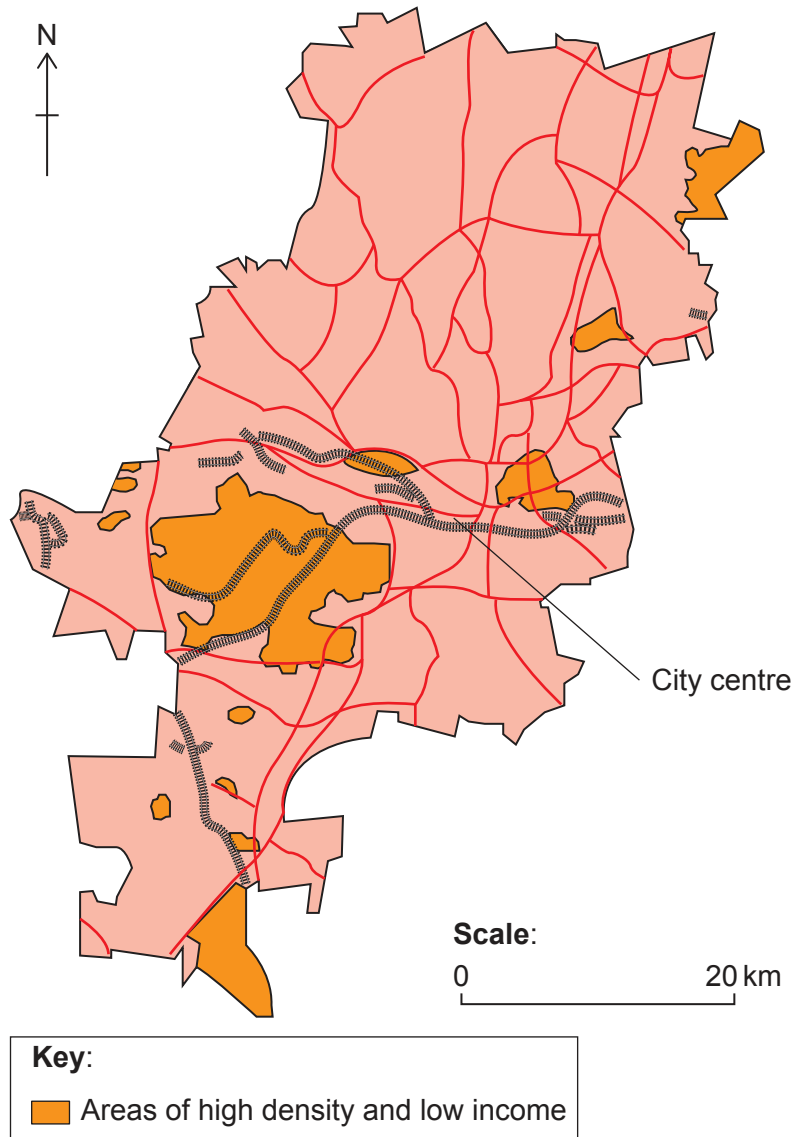
Map B

Removed for copyright reasons

Turn over

Option G — Urban environments

13. The map shows the distribution of the neighbourhoods in an African city with low incomes and high population density.



[Source: Adapted from P Guinness, *Johannesburg – a city of acute disparity*, Topic Eye A-Level Geography 2014–2015 edition, page 11, published by Cross Academe Limited.]